



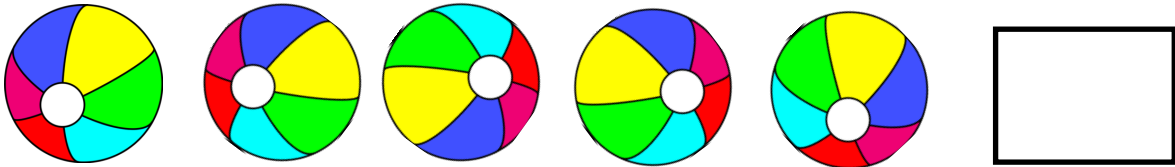



Quicksilver



Whoosh! Quicksilver is here to test you on your counting!
Count how many objects you can see and write your answer
at the end of the row!

0 1 2 3 4 5



Quicksilver

Wow! You've stopped Quicksilver in his tracks with your awesome counting!

Now, can you complete the additions to defeat him for good?

$$\begin{array}{c} \boxed{\begin{array}{c} \bullet \\ \bullet \end{array}} + \boxed{\begin{array}{c} \bullet \end{array}} = \boxed{\begin{array}{c} \bullet \\ \bullet \\ \bullet \end{array}} \\ 2 + 1 = 3 \end{array}$$

$$\begin{array}{c} \boxed{\begin{array}{c} \bullet \\ \bullet \\ \bullet \end{array}} + \boxed{\begin{array}{c} \bullet \\ \bullet \end{array}} = \boxed{\phantom{\begin{array}{c} \bullet \\ \bullet \\ \bullet \end{array}}} \\ \underline{} + \underline{} = \underline{} \end{array}$$

$$\begin{array}{c} \boxed{\begin{array}{c} \bullet \end{array}} + \boxed{\begin{array}{c} \bullet \end{array}} = \boxed{\phantom{\begin{array}{c} \bullet \end{array}}} \\ \underline{} + \underline{} = \underline{} \end{array}$$

$$\begin{array}{c} \boxed{\begin{array}{c} \bullet \bullet \\ \bullet \bullet \end{array}} + \boxed{\begin{array}{c} \bullet \end{array}} = \boxed{\phantom{\begin{array}{c} \bullet \bullet \\ \bullet \bullet \end{array}}} \\ \underline{} + \underline{} = \underline{} \end{array}$$

$$\begin{array}{c} \boxed{\phantom{\begin{array}{c} \bullet \bullet \\ \bullet \bullet \end{array}}} + \boxed{\begin{array}{c} \bullet \end{array}} = \boxed{\phantom{\begin{array}{c} \bullet \bullet \\ \bullet \bullet \end{array}}} \\ \underline{} + \underline{} = \underline{} \end{array}$$

$$\begin{array}{c} \boxed{\begin{array}{c} \bullet \end{array}} + \boxed{\begin{array}{c} \bullet \\ \bullet \end{array}} = \boxed{\phantom{\begin{array}{c} \bullet \\ \bullet \end{array}}} \\ \underline{} + \underline{} = \underline{} \end{array}$$

$$\begin{array}{c} \boxed{\begin{array}{c} \bullet \\ \bullet \\ \bullet \end{array}} + \boxed{\begin{array}{c} \bullet \end{array}} = \boxed{\phantom{\begin{array}{c} \bullet \\ \bullet \\ \bullet \end{array}}} \\ \underline{} + \underline{} = \underline{} \end{array}$$

$$\begin{array}{c} \boxed{\begin{array}{c} \bullet \\ \bullet \end{array}} + \boxed{\begin{array}{c} \bullet \\ \bullet \end{array}} = \boxed{\phantom{\begin{array}{c} \bullet \\ \bullet \end{array}}} \\ \underline{} + \underline{} = \underline{} \end{array}$$

$$\begin{array}{c} \boxed{\begin{array}{c} \bullet \bullet \\ \bullet \bullet \end{array}} + \boxed{\phantom{\begin{array}{c} \bullet \bullet \\ \bullet \bullet \end{array}}} = \boxed{\phantom{\begin{array}{c} \bullet \bullet \\ \bullet \bullet \end{array}}} \\ \underline{} + \underline{} = \underline{} \end{array}$$